





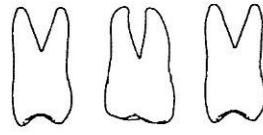

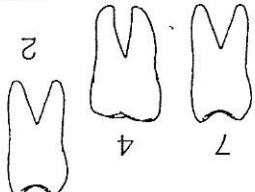

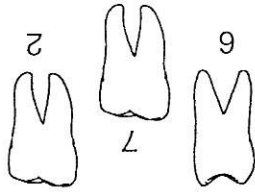

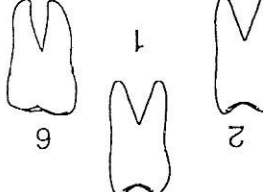

 <hr/> 9 - 8 2  <hr/> 8 4 - 6 6	 <hr/> 8 1 - 1 4  <hr/> 7 1 - 3 4	 <hr/> 8 2 - 4 6  <hr/> 9 1 - 2 7
 <hr/> 9 9 6 + 6 8 2 6 1 7	 <hr/> 7 8 4 + 5 7 1 4 2 3	 <hr/> 9 7 + 2 9 8 8 2 9
 <hr/> 2 4 7 -  <hr/> 6 1 - 6 7	 <hr/> 2 7 6 -  <hr/> 5 4 - 2 6	 <hr/> 6 1 2 +  <hr/> 9 1 - 7 5

Izračunaj.